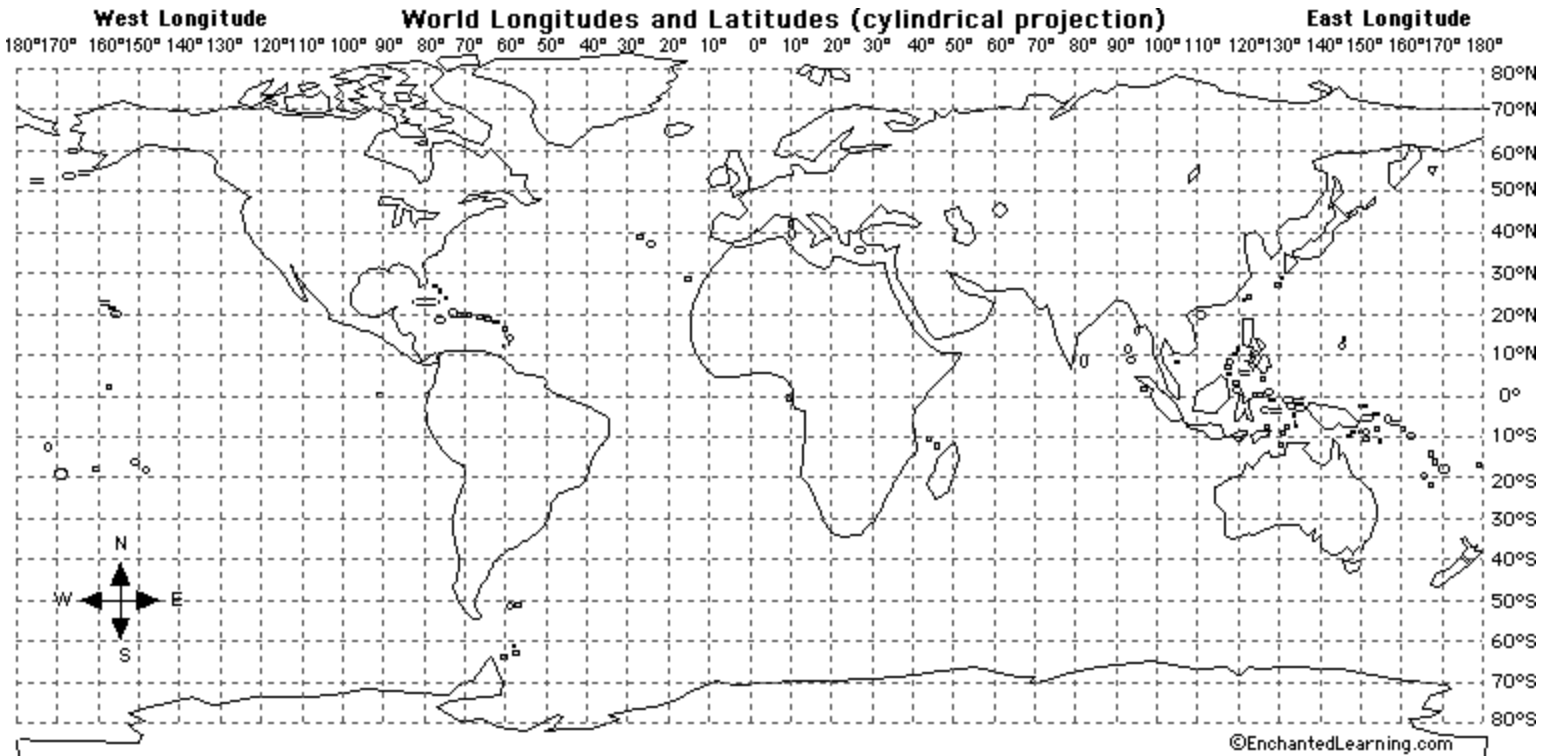


Name _____ Period _____ Date _____

World Latitude and Longitude Activity



Using the [world longitude and latitude map printout](#), answer the following questions and mark the locations.

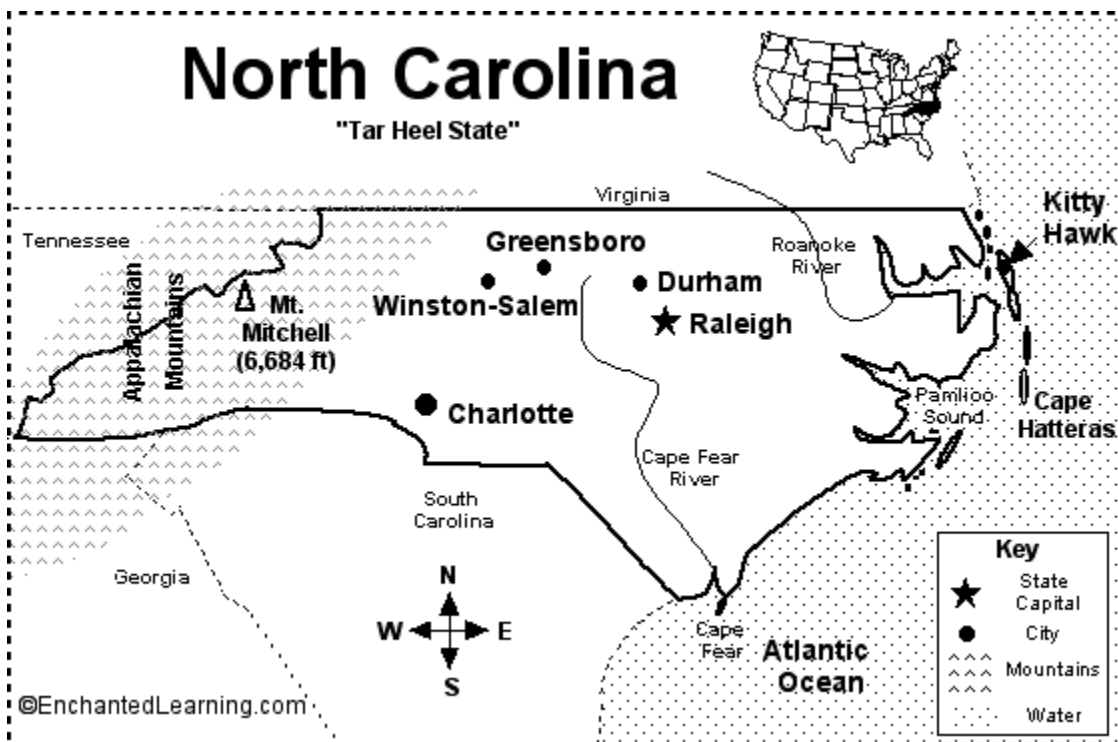
1. Draw a red line along the equator (0 degrees latitude).
2. Draw a purple line along the Prime Meridian (0 degrees longitude).
3. In which ocean is the location 10 degrees S latitude, 75 degrees E longitude located? Mark it on the map with a blue "X" and write the name of the ocean.
4. In which ocean is the location 30 degrees N latitude, 60 degrees W longitude located? Mark it on the map with a blue "Y" and write the name of the ocean.
5. Mark the following cities on the map in red:

B. Beijing: 40°N, 116°E
C. Cairo: 30°N, 31°E
CT. Cape Town: 34°S, 18°E
H. Hong Kong: 22°N, 114°E
J. Jakarta: 6°S, 106°E
LA. Los Angeles: 34°N, 118°W
LI. Lima: 12°S, 77°W

LO. London: 51°N, 0°W
MC. Mexico City: 19°N, 99°W
MO. Moscow: 55°N, 37°E
MU. Mumbai: 19°N, 72°E
NA. Nairobi: 1°S, 37°E
NO. New Orleans: 30°N, 90°W
NY. New York: 40°N, 74°W

R. Rio de Janeiro: 23°S, 43°W
SE. Seattle: 47°N, 122°W
SY. Sydney: 34°S, 151°E
TK. Tokyo: 35°N, 139°E
T. Toronto: 43°N, 79°W

1. What is the capital of North Carolina? _____
2. What ocean borders North Carolina on the east? _____
3. What state borders North Carolina on the north? _____
4. What state borders North Carolina on the west? _____
5. What two states border North Carolina on the south? _____ and _____
6. Name a mountain range located in the western part of North Carolina. _____
7. What is the name of the tallest mountain in North Carolina? _____
8. Name two rivers in North Carolina. _____ and _____
9. Name the town from which the Wright brothers successfully flew the world's first airplane in 1903. It is located on an island off the coast of northeastern North Carolina. _____
10. What is the nickname of North Carolina? _____



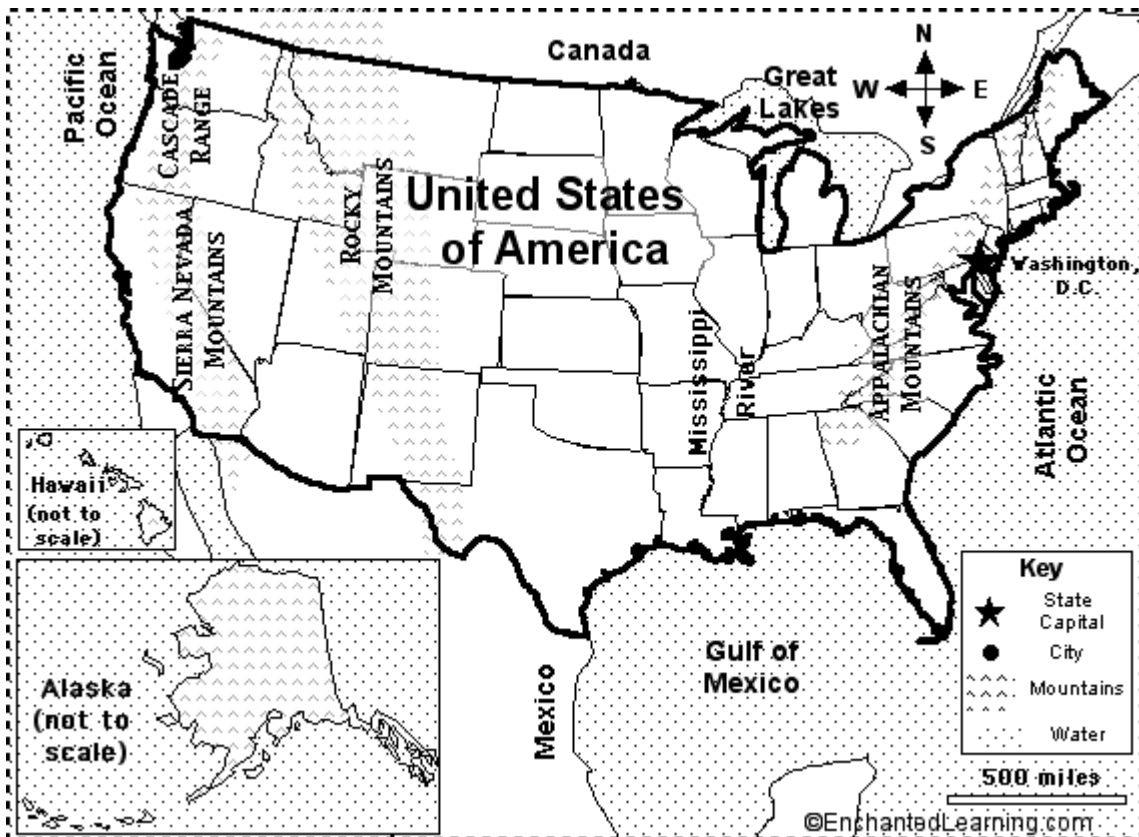
1. What is the capital city of the USA? _____
2. What country borders the USA on the north? _____
3. What country borders the USA on the south? _____
4. What ocean borders the USA on the west? _____
5. What ocean borders the USA on the east? _____
6. What large body of water (a gulf) borders the USA on the southeast?

7. What are the huge lakes in the northeastern USA called?

8. What is the name of the large mountain range in the western USA that runs from Canada to Texas?

9. What is the name of the large mountain range in the eastern USA?

10. What is the name of the large river that flows north-south through the USA?



1. The location 26 degrees N, 105 degrees W is in what country? Mark the spot on the map with a black X.	
2. Is the location 35 degrees N latitude, 75 degrees W longitude in the Atlantic or Pacific Ocean? Mark it on the map with a green X.	
3. Is the location 30 degrees N, 87 degrees W on land or under water. Mark it on the map with a blue X.	
4. On the map, label the location 38 degrees N latitude, 105 degrees W longitude with a red X and write the name of the state it is in.	
5. The location 43 degrees N, 75 degrees W is in what state? On the map, write the state's name.	
6. Name the state whose southern border is latitude 35 degrees N, and label the state on the map.	
7. Do lines of latitude run east-west or north-south?	
8. Name three states that extend below latitude 30 degrees N (in the contiguous US), and label them on the map.	
9. Name one US state that is mostly east of longitude 70 degrees W, and label it on the map.	
10. Name three US states (shown on this map) that extend west of longitude 120 degrees W, and label them on the map.	
11. Is the location 45 degrees N latitude, 82 degrees W longitude on land or under water? On the map, mark it with a red X.	
12. Name the state that is located entirely between 40-45 degrees N latitude and between 90-100 degrees W longitude, and label it on the map.	

